

© International Baccalaureate Organization 2022

All rights reserved. No part of this product may be reproduced in any form or by any electronic or mechanical means, including information storage and retrieval systems, without the prior written permission from the IB. Additionally, the license tied with this product prohibits use of any selected files or extracts from this product. Use by third parties, including but not limited to publishers, private teachers, tutoring or study services, preparatory schools, vendors operating curriculum mapping services or teacher resource digital platforms and app developers, whether fee-covered or not, is prohibited and is a criminal offense.

More information on how to request written permission in the form of a license can be obtained from <https://ibo.org/become-an-ib-school/ib-publishing/licensing/applying-for-a-license/>.

© Organisation du Baccalauréat International 2022

Tous droits réservés. Aucune partie de ce produit ne peut être reproduite sous quelque forme ni par quelque moyen que ce soit, électronique ou mécanique, y compris des systèmes de stockage et de récupération d'informations, sans l'autorisation écrite préalable de l'IB. De plus, la licence associée à ce produit interdit toute utilisation de tout fichier ou extrait sélectionné dans ce produit. L'utilisation par des tiers, y compris, sans toutefois s'y limiter, des éditeurs, des professeurs particuliers, des services de tutorat ou d'aide aux études, des établissements de préparation à l'enseignement supérieur, des fournisseurs de services de planification des programmes d'études, des gestionnaires de plateformes pédagogiques en ligne, et des développeurs d'applications, moyennant paiement ou non, est interdite et constitue une infraction pénale.

Pour plus d'informations sur la procédure à suivre pour obtenir une autorisation écrite sous la forme d'une licence, rendez-vous à l'adresse <https://ibo.org/become-an-ib-school/ib-publishing/licensing/applying-for-a-license/>.

© Organización del Bachillerato Internacional, 2022

Todos los derechos reservados. No se podrá reproducir ninguna parte de este producto de ninguna forma ni por ningún medio electrónico o mecánico, incluidos los sistemas de almacenamiento y recuperación de información, sin la previa autorización por escrito del IB. Además, la licencia vinculada a este producto prohíbe el uso de todo archivo o fragmento seleccionado de este producto. El uso por parte de terceros —lo que incluye, a título enunciativo, editoriales, profesores particulares, servicios de apoyo académico o ayuda para el estudio, colegios preparatorios, desarrolladores de aplicaciones y entidades que presten servicios de planificación curricular u ofrezcan recursos para docentes mediante plataformas digitales—, ya sea incluido en tasas o no, está prohibido y constituye un delito.

En este enlace encontrará más información sobre cómo solicitar una autorización por escrito en forma de licencia: <https://ibo.org/become-an-ib-school/ib-publishing/licensing/applying-for-a-license/>.

Mathematics: analysis and approaches
Higher level
Paper 3

Thursday 12 May 2022 (morning)

1 hour

Instructions to candidates

- Do not open this examination paper until instructed to do so.
- A graphic display calculator is required for this paper.
- Answer all the questions in the answer booklet provided.
- Unless otherwise stated in the question, all numerical answers should be given exactly or correct to three significant figures.
- A clean copy of the **mathematics: analysis and approaches formula booklet** is required for this paper.
- The maximum mark for this examination paper is **[55 marks]**.

Answer **all** questions in the answer booklet provided. Please start each question on a new page. Full marks are not necessarily awarded for a correct answer with no working. Answers must be supported by working and/or explanations. Solutions found from a graphic display calculator should be supported by suitable working. For example, if graphs are used to find a solution, you should sketch these as part of your answer. Where an answer is incorrect, some marks may be given for a correct method, provided this is shown by written working. You are therefore advised to show all working.




1. [Maximum marks: 27]

This question asks you to explore some properties of polygonal numbers and to determine and prove interesting results involving these numbers.

A polygonal number is an integer which can be represented as a series of dots arranged in the shape of a regular polygon. Triangular numbers, square numbers and pentagonal numbers are examples of polygonal numbers.

For example, a triangular number is a number that can be arranged in the shape of an equilateral triangle. The first five triangular numbers are 1, 3, 6, 10 and 15.

The following table illustrates the first five triangular, square and pentagonal numbers respectively. In each case the first polygonal number is one represented by a single dot.

Type of polygonal number	Geometric representation	Values
Triangular numbers		1, 3, 6, 10, 15, ...
Square numbers		1, 4, 9, 16, 25, ...
Pentagonal numbers		1, 5, 12, 22, 35, ...

For an r -sided regular polygon, where $r \in \mathbb{Z}^+$, $r \geq 3$, the n th polygonal number $P_r(n)$ is given by

$$P_r(n) = \frac{(r-2)n^2 - (r-4)n}{2}, \text{ where } n \in \mathbb{Z}^+.$$

(This question continues on the following page)

(Question 1 continued)

Hence, for square numbers, $P_4(n) = \frac{(4-2)n^2 - (4-4)n}{2} = n^2$.

- (a) (i) For triangular numbers, verify that $P_3(n) = \frac{n(n+1)}{2}$. [2]
 (ii) The number 351 is a triangular number. Determine which one it is. [2]
- (b) (i) Show that $P_3(n) + P_3(n+1) \equiv (n+1)^2$. [2]
 (ii) State, in words, what the identity given in part (b)(i) shows for two consecutive triangular numbers. [1]
 (iii) For $n = 4$, sketch a diagram clearly showing your answer to part (b)(ii). [1]
- (c) Show that $8P_3(n) + 1$ is the square of an odd number for all $n \in \mathbb{Z}^+$. [3]

The n th pentagonal number can be represented by the arithmetic series

$$P_5(n) = 1 + 4 + 7 + \dots + (3n - 2).$$

- (d) Hence show that $P_5(n) = \frac{n(3n-1)}{2}$ for $n \in \mathbb{Z}^+$. [3]
 (e) By using a suitable table of values or otherwise, determine the smallest positive integer, greater than 1, that is both a triangular number and a pentagonal number. [5]

A polygonal number, $P_r(n)$, can be represented by the series

$$\sum_{m=1}^n (1 + (m-1)(r-2)) \text{ where } r \in \mathbb{Z}^+, r \geq 3.$$

- (f) Use mathematical induction to prove that $P_r(n) = \frac{(r-2)n^2 - (r-4)n}{2}$ where $n \in \mathbb{Z}^+$. [8]

2. [Maximum marks: 28]

This question asks you to explore cubic polynomials of the form $(x - r)(x^2 - 2ax + a^2 + b^2)$ for $x \in \mathbb{R}$ and corresponding cubic equations with one real root and two complex roots of the form $(z - r)(z^2 - 2az + a^2 + b^2) = 0$ for $z \in \mathbb{C}$.

In parts (a), (b) and (c), let $r = 1$, $a = 4$ and $b = 1$.

Consider the equation $(z - 1)(z^2 - 8z + 17) = 0$ for $z \in \mathbb{C}$.

(a) (i) Given that 1 and $4 + i$ are roots of the equation, write down the third root. [1]

(ii) Verify that the mean of the two complex roots is 4. [1]

Consider the function $f(x) = (x - 1)(x^2 - 8x + 17)$ for $x \in \mathbb{R}$.

(b) Show that the line $y = x - 1$ is tangent to the curve $y = f(x)$ at the point $A(4, 3)$. [4]

(c) Sketch the curve $y = f(x)$ and the tangent to the curve at point A , clearly showing where the tangent crosses the x -axis. [2]

Consider the function $g(x) = (x - r)(x^2 - 2ax + a^2 + b^2)$ for $x \in \mathbb{R}$ where $r, a \in \mathbb{R}$ and $b \in \mathbb{R}, b > 0$.

(d) (i) Show that $g'(x) = 2(x - r)(x - a) + x^2 - 2ax + a^2 + b^2$. [2]

(ii) Hence, or otherwise, prove that the tangent to the curve $y = g(x)$ at the point $A(a, g(a))$ intersects the x -axis at the point $R(r, 0)$. [6]

The equation $(z - r)(z^2 - 2az + a^2 + b^2) = 0$ for $z \in \mathbb{C}$ has roots r and $a \pm bi$ where $r, a \in \mathbb{R}$ and $b \in \mathbb{R}, b > 0$.

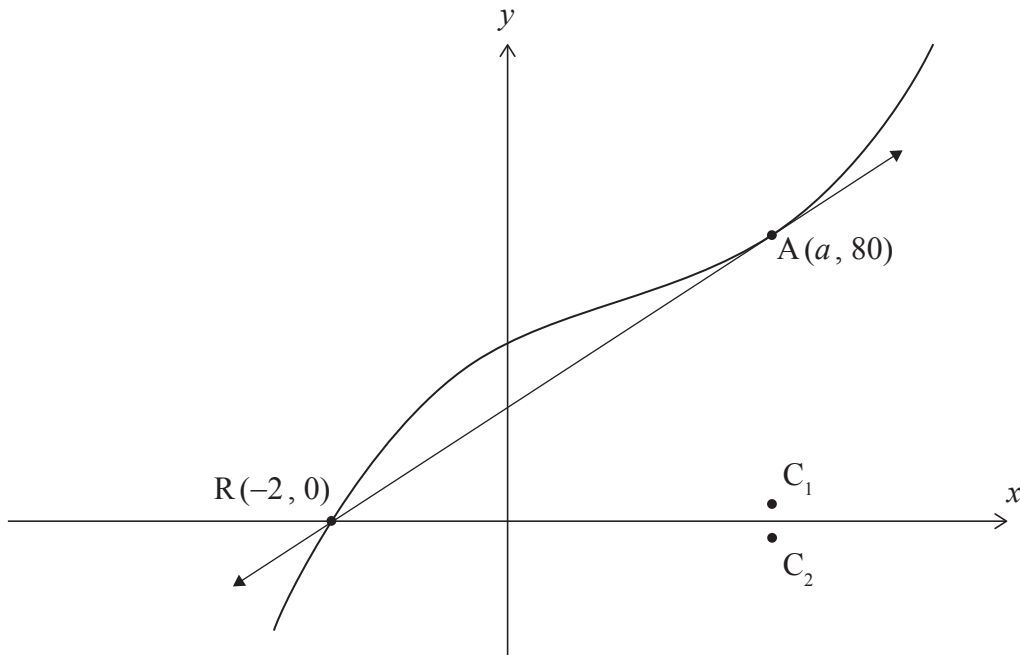
(e) Deduce from part (d)(i) that the complex roots of the equation $(z - r)(z^2 - 2az + a^2 + b^2) = 0$ can be expressed as $a \pm i\sqrt{g'(a)}$. [1]

(This question continues on the following page)

(Question 2 continued)

On the Cartesian plane, the points $C_1(a, \sqrt{g'(a)})$ and $C_2(a, -\sqrt{g'(a)})$ represent the real and imaginary parts of the complex roots of the equation $(z - r)(z^2 - 2az + a^2 + b^2) = 0$.

The following diagram shows a particular curve of the form $y = (x - r)(x^2 - 2ax + a^2 + 16)$ and the tangent to the curve at the point $A(a, 80)$. The curve and the tangent both intersect the x -axis at the point $R(-2, 0)$. The points C_1 and C_2 are also shown.



- (f) (i) Use this diagram to determine the roots of the corresponding equation of the form $(z - r)(z^2 - 2az + a^2 + 16) = 0$ for $z \in \mathbb{C}$. [4]
- (ii) State the coordinates of C_2 . [1]

Consider the curve $y = (x - r)(x^2 - 2ax + a^2 + b^2)$ for $a \neq r, b > 0$. The points $A(a, g(a))$ and $R(r, 0)$ are as defined in part (d)(ii). The curve has a point of inflexion at point P.

- (g) (i) Show that the x -coordinate of P is $\frac{1}{3}(2a + r)$.
You are **not** required to demonstrate a change in concavity. [2]
- (ii) Hence describe numerically the horizontal position of point P relative to the horizontal positions of the points R and A. [1]

Consider the special case where $a = r$ and $b > 0$.

- (h) (i) Sketch the curve $y = (x - r)(x^2 - 2ax + a^2 + b^2)$ for $a = r = 1$ and $b = 2$. [2]
- (ii) For $a = r$ and $b > 0$, state in terms of r , the coordinates of points P and A. [1]

References: